

Patterns

Look at each pattern. Find two pictures that complete the pattern.



1

① ② ③ ④ ⑤

2

① ② ③ ④ ⑤

3


① ② ③ ④ ⑤



Pattern completion

Look at the picture. You see that one piece is missing. Find the missing piece that belongs in the box with the question mark.

1



①



②



③




④



⑤

2



①



②



③



④




⑤

Reasoning by analogy

Look at the box with the pictures in it. You see two pictures in a row. They go together in a certain way. Find out how they are connected. Two pictures in another row should go together in the same way. Which of the pictures below belongs in the box with a question mark?

1



①



②



③

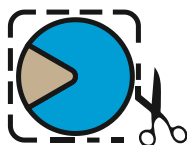
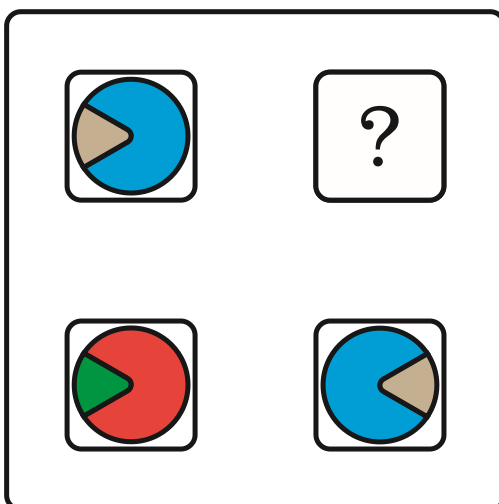


④

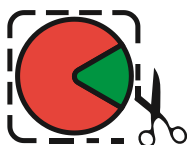


⑤

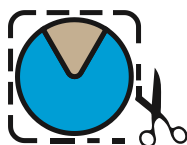
2



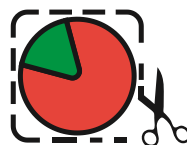
①



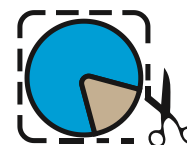
②



③



④





⑤

Serial reasoning

Look at the box with the pictures in it. They go together in a certain way in a row and in a column. Find out how they are connected. Which of the pictures below belongs in the box with a question mark?

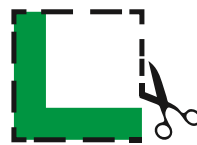
1




①



②



③

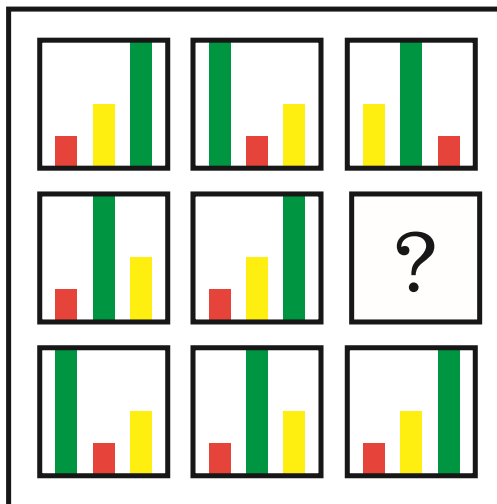


④



⑤

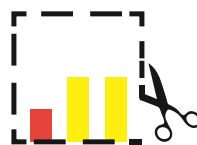
2



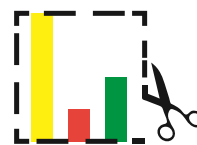
①



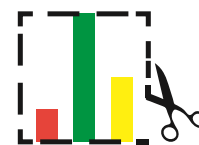
②



③



④



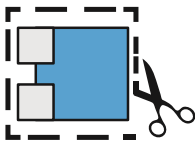

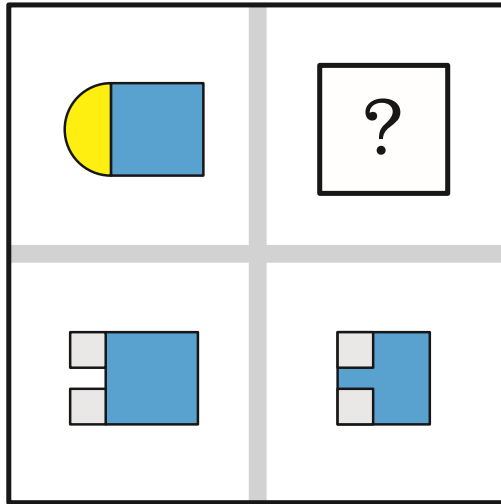
⑤



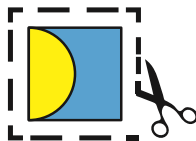
Spatial visualisation

Look at the box with the pictures in it. Pictures in a row go together in a certain way. Find out how they are connected. Pictures in another row should go together in the same way. Which of the pictures below belongs in the box with a question mark?

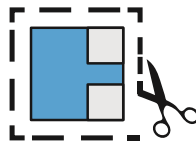
1




①



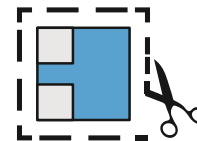
②



③

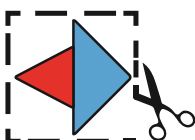
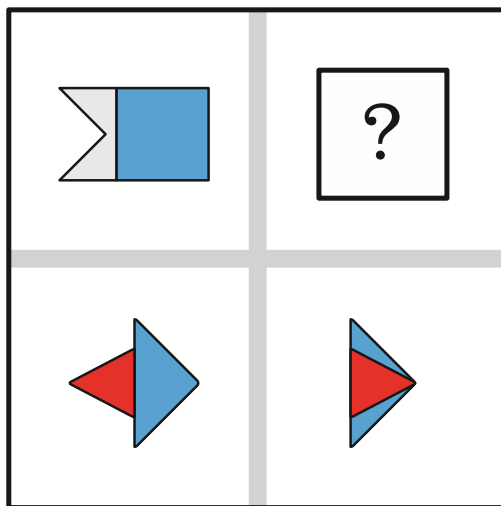


④




⑤

2



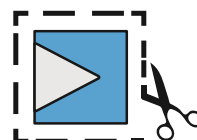
①



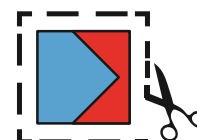
②



③



④




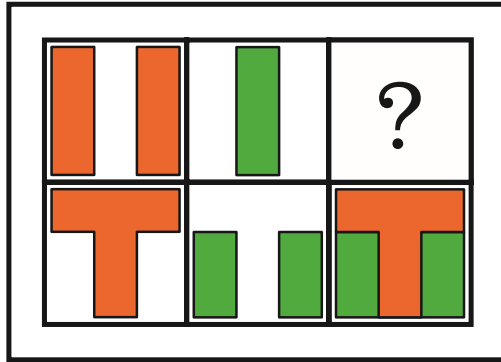
⑤



Spatial visualisation

Look at the box with the pictures in it. Pictures in a row go together in a certain way. Find out how they are connected. Pictures in another row should go together in the same way. Which of the pictures below belongs in the box with a question mark?

1



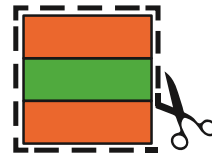
①



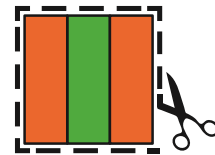
②



③

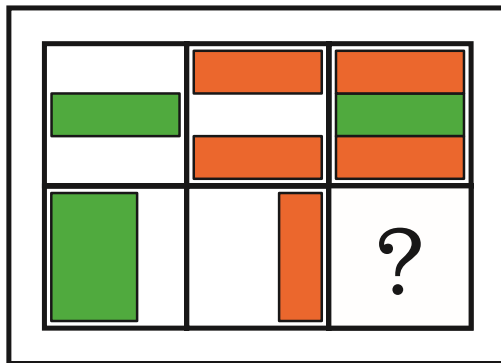


④



⑤

2



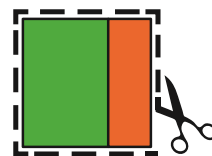
①




②



③



④



⑤